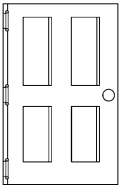




Name: _____

Date: _____

Class/Group: _____

A: Place Value, Add and Subtract		B: Multiply, Divide and Fractions		C: Measure and Geometry	
1. What is the missing number? 0 2 4 6 8 10 <input type="text"/>	2:1	11. $25 \div 5 =$	2:11	21. Estimate the height of a door. Write a, b or c. a. about 2m b. about 20cm c. about 200mm	2:17 
2. What is the value of the 8 in this number? 83	2:2	12. Which are the odd numbers? 5 10 15 20	2:11	22. How many five pence (5p) coins are the same value as a fifty pence (50p) coin? 	2:19
3. What number is labelled? 	2:3	13. What symbol is missing? 3 <input type="text"/> 4 = 12	2:12		
4. Which numbers are < 15? 12 14 16 18	2:4	14. What symbol is missing? 40 <input type="text"/> 4 = 10	2:12	23. Katie has one pound (£1). She spends twenty-five pence (25p). How much money does she have left?	2:20
5. Write this number in numerals. sixty five	2:5	15. Is this true? Write 'yes' or 'no'. $8 \div 2 = 2 \div 8$	2:13		
6. There are 30 children in a class. 15 are girls. How many are boys?	2:6	16. 5 children share 15 sweets. How many sweets does each child get?	2:14	24. Which is longest? Write a, b, or c. a. half an hour b. 40 minutes c. quarter of an hour	2:21
7. $20 - 16 =$	2:7	17. 6 teams enter a 5-a-side contest. How many players are in the contest?	2:14		
8. $34 + 10 =$	2:8	18. Write the fraction one quarter in numerals.	2:15	25. Ben arrives at the park at ten o'clock. He leaves at eleven o'clock. How many minutes does he spend at the park?	2:22
9. Is this true? Write 'yes' or 'no'. $19 + 8 = 8 + 19$	2:9	19. How many thirds are in 1 whole?	2:15		
10. Use $31 + 23 = 54$ to help find: $54 - 31 =$ <input type="text"/>	2:10	20. What is $\frac{1}{2}$ of 8?	2:16		
Total (A)		Total (B)		Total (C)	
Test Total (A+B+C)		R (0-9)	Y (10-19)	G (20-25)	